

Prénom :

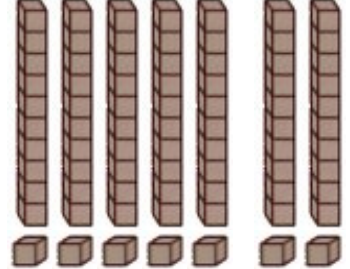
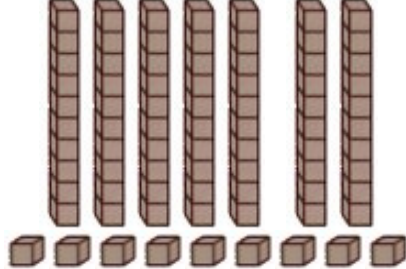
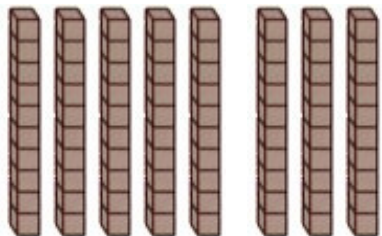
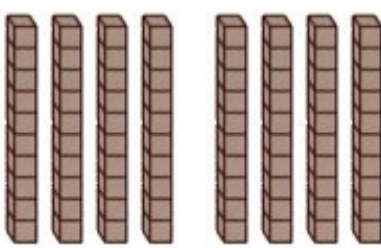
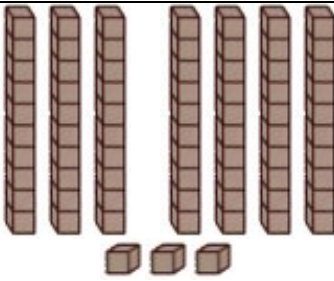
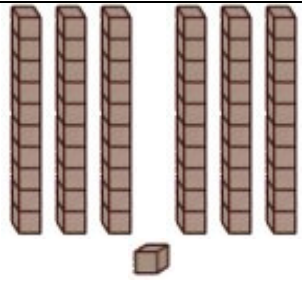
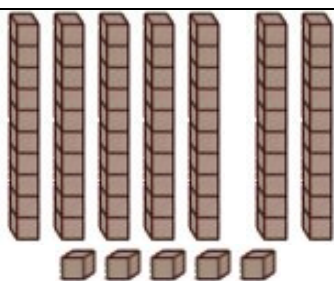
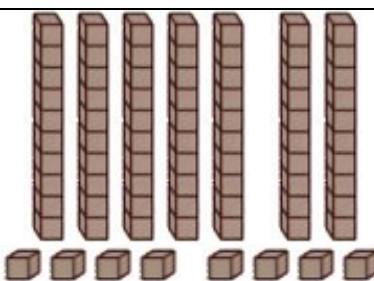
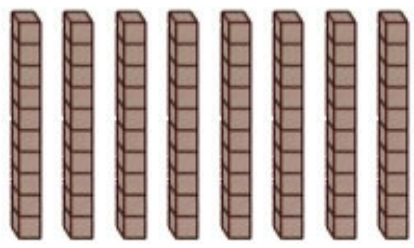
Date :

| | |
|----------------|--|
| COMPTER | Je compte jusqu'à... 80 <small>(02)</small> |
|----------------|--|

- Complète la suite numérique de 1 à 80 :

| | | | | | | | | | |
|----|-------|----|-------|----|-------|-------|----|-------|----|
| 1 | 2 | 3 | 4 | 5 | 6 | 7 | 8 | 9 | 10 |
| 11 | | 13 | | 15 | | | 18 | | 20 |
| 21 | 22 | 23 | 24 | 25 | 26 | 27 | 28 | 29 | 30 |
| 31 | | 33 | | 35 | | | 38 | | 40 |
| 41 | 42 | 43 | 44 | 45 | 46 | 47 | 48 | 49 | 50 |
| 51 | | 53 | | 55 | | | 58 | | 60 |
| 61 | 62 | 63 | 64 | 65 | 66 | 67 | 68 | 69 | 70 |
| 71 | | 73 | | 75 | | | 78 | | 80 |

- Combien y a-t-il de cubes dans les cases suivantes ?

| | | |
|--|--|--|
|  55 66 77 |  59 79 69 |  60 70 80 |
|  80 70 60 |  73 63 43 |  71 61 16 |
|  75 65 55 |  74 58 78 |  60 80 70 |

- Observe et complète :

| | | | | | | | | | | |
|---|----|----|----|-------|----|-------|-------|-------|-------|----|
| ▶ | 35 | 40 | 45 | | 55 | | | | | 80 |
|---|----|----|----|-------|----|-------|-------|-------|-------|----|