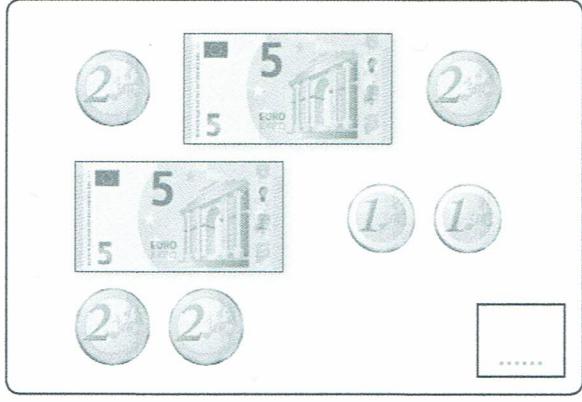



Exercice




1 (séance 3) 1,2,3 Calcule la somme d'argent dans chaque case.

 <div style="text-align: right; border: 1px solid black; width: 50px; height: 30px; margin-left: auto; margin-top: 10px;"></div>	 <div style="text-align: right; border: 1px solid black; width: 50px; height: 30px; margin-left: auto; margin-top: 10px;"></div>
---	--

21 Monnaie

Exercice

2 (séance 4) 1,2,3 Calcule la somme d'argent dans chaque case, puis range les sommes de la plus petite à la plus grande.

 <div style="text-align: right; border: 1px solid black; width: 50px; height: 30px; margin-left: auto; margin-top: 10px;"></div>	 <div style="text-align: right; border: 1px solid black; width: 50px; height: 30px; margin-left: auto; margin-top: 10px;"></div>
 <div style="text-align: right; border: 1px solid black; width: 50px; height: 30px; margin-left: auto; margin-top: 10px;"></div>	
<p>..... &lt; ..... &lt; .....</p>	

21 Monnaie

Exercices supplémentaires