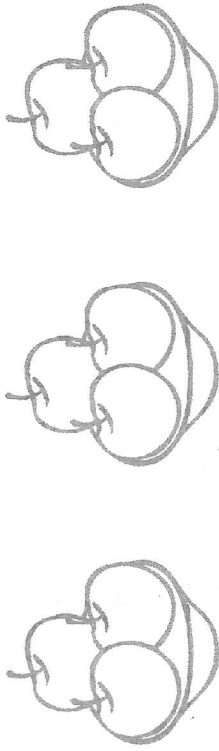


1 Complétez.

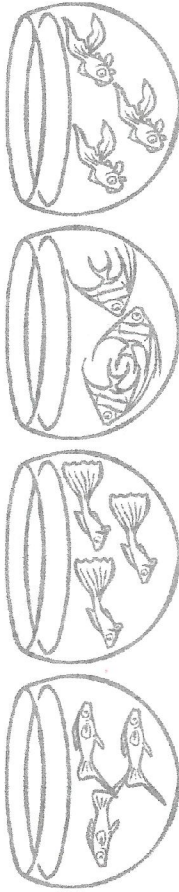


Combien y a-t-il de pommes en tout ?

$$\boxed{3} \times \boxed{3} \text{ pommes} = \boxed{9} \text{ pommes}$$

Il y a $\boxed{9}$ pommes en tout.

2 Complétez.




Combien y a-t-il de poissons en tout ?

$$\boxed{4} \times \boxed{3} \text{ poissons} = \boxed{12} \text{ poissons}$$

Il y a $\boxed{12}$ poissons en tout.

3 Complétez.




Combien y a-t-il de fourchettes en tout ?

$$\boxed{3} \times \boxed{5} \text{ fourchettes} = \boxed{15} \text{ fourchettes}$$

Il y a $\boxed{15}$ fourchettes en tout.

4 Complétez.

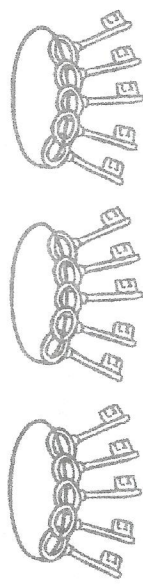
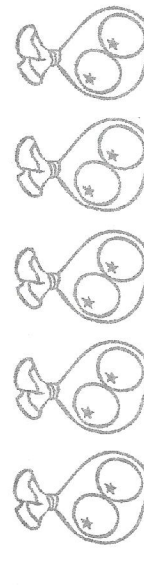




Combien y a-t-il de timbres en tout ?

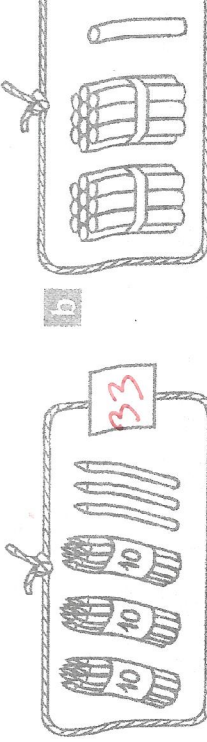
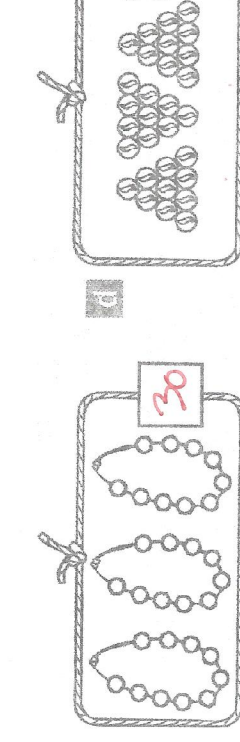
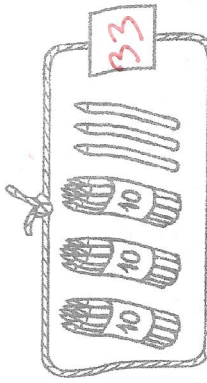
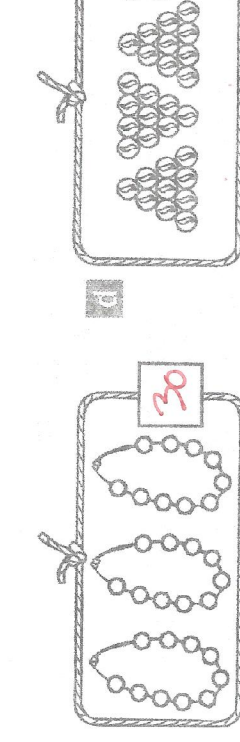
$$\boxed{3} \times \boxed{8} \text{ timbres} = \boxed{24} \text{ timbres}$$

Il y a $\boxed{24}$ timbres en tout.

5 Complétez la multiplication pour chacun des dessins suivants :



<p>a</p>  <p>3×5 clés = 15 clés</p>	<p>b</p>  <p>5×2 pommes = 10 pommes</p>	<p>c</p>  <p>4×3 poires = 12 poires</p>	<p>d</p>  <p>6×3 perles = 18 perles</p>
---	---	--	---

1 Écrivez le nombre d'éléments de chaque ensemble.

<p>a</p>  <p>33</p>	<p>b</p>  <p>21</p>
<p>c</p>  <p>30</p>	<p>d</p>  <p>32</p>

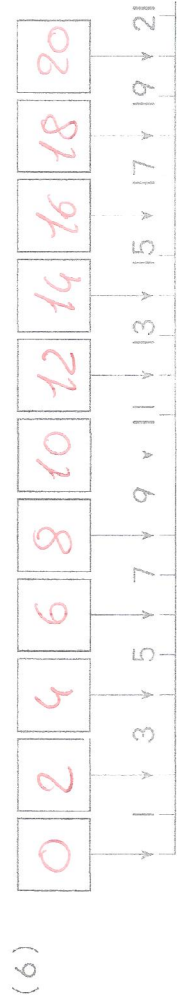
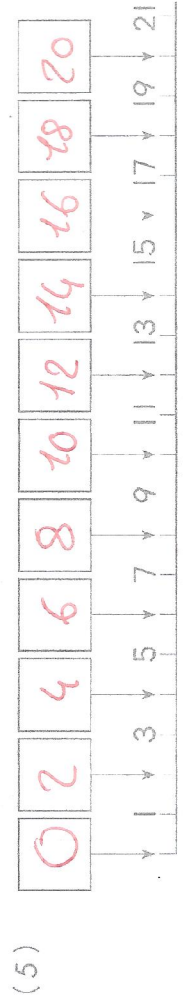
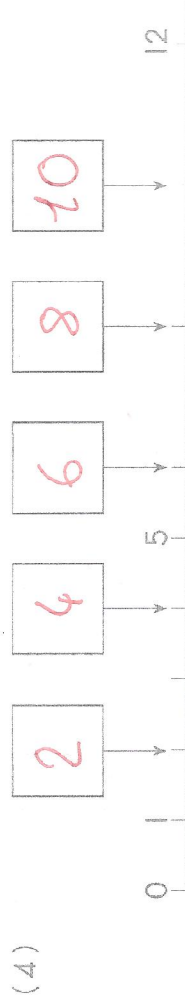
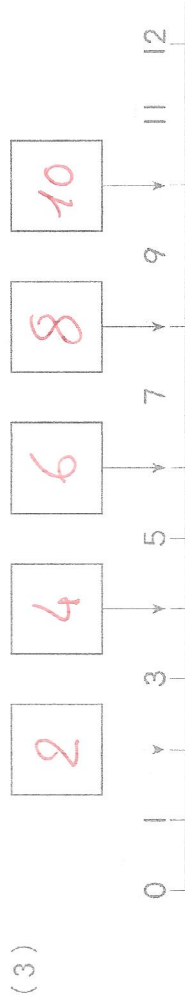
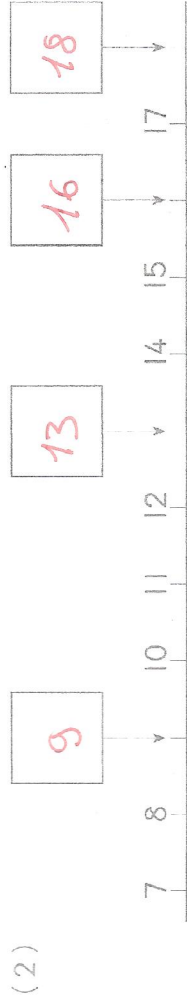
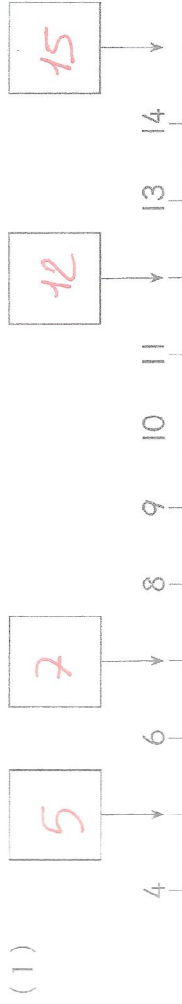
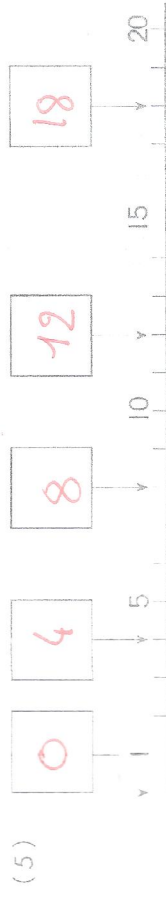
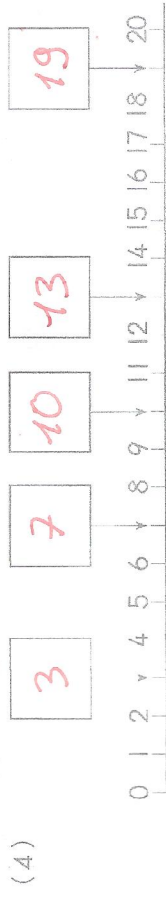
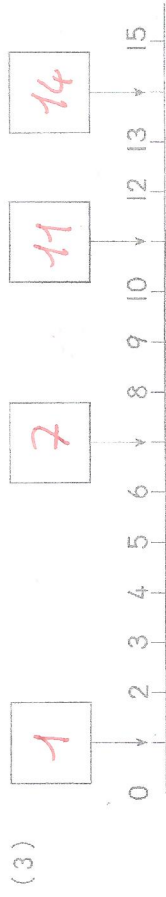
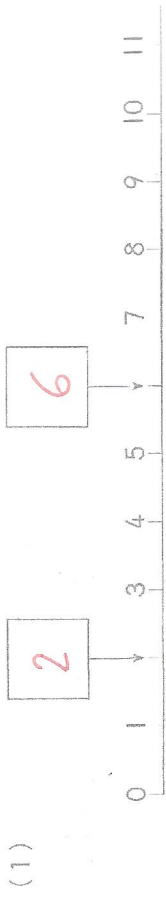
2 Dessinez, puis complétez la phrase.

David a 4 billes.
Romain a 2 billes de plus que David.
Dessinez les billes de Romain.

<p>Les billes de David</p> 	<p>Les billes de Romain</p> 
--	---

Romain a **6** billes.

Compléter les cases avec les bons nombres.



Compléter les tableaux avec les bons nombres.

1	2	3	4	5	6	7	8	9	10
11	12	13	14	15	16	17	18	19	20

1	2	3	4	5	6	7	8	9	10
11	12	13	14	15	16	17	18	19	20

1	2	3	4	5	6	7	8	9	10
11	12	13	14	15	16	17	18	19	20

1	2	3	4	5	6	7	8	9	10
11	12	13	14	15	16	17	18	19	20


1	2	3	4	5	6	7	8	9	10
11	12	13	14	15	16	17	18	19	20

10	11	12	13	14	15
15	16	17	18	19	20
20	19	18	17	16	15
14	13	12	11	10	9

12	13	14	15	16	17
18	17	16	15	14	13
10	12	14	16	18	20
20	18	16	14	12	10


En t'aidant des dizaines et unités écris combien il y a de buchettes dans chaque cadre.

(1)




16

(2)




19

(3)




22

(4)




27

(5)




34

(6)




38

(7)




42

(8)




45

(9)




53

(10)




55

(11)



64

(12)



66

(1) $2 \times 8 = 16$

(8) $2 \times 3 = 6$

(15) $2 \times 5 = 10$

(2) $2 \times 3 = 6$

(9) $2 \times 7 = 14$

(16) $2 \times 1 = 2$

(3) $2 \times 1 = 2$

(10) $2 \times 5 = 10$

(17) $2 \times 4 = 8$

(4) $2 \times 6 = 12$

(11) $2 \times 8 = 16$

(18) $2 \times 6 = 12$

(5) $2 \times 9 = 18$

(12) $2 \times 0 = 0$

(19) $2 \times 3 = 6$

(6) $2 \times 4 = 8$

(13) $2 \times 9 = 18$

(20) $2 \times 7 = 14$

(7) $2 \times 2 = 4$

(14) $2 \times 6 = 12$

(1) $2 \times 1 = 2$

(6) $2 \times 6 = 12$

(2) $2 \times 2 = 4$

(7) $2 \times 7 = 14$

(3) $2 \times 3 = 6$

(8) $2 \times 8 = 16$

(4) $2 \times 4 = 8$

(9) $2 \times 9 = 18$

(5) $2 \times 5 = 10$

(10) $2 \times 3 = 6$

cherchera un maximum de manière de réaliser 14€, qu'il copiera sur cette page ensuite.

10€ 2€ 2€

10€ 2€ 1€ 1€

10€ 2€ 1€ 1€ 1€

5€ 5€ 2€ 2€

5€ 5€ 2€ 1€ 1€

5€ 5€ 1€ 1€ 1€ 1€

5€ 2€ 2€ 1€ 2€ 2€

5€ 2€ 2€ 1€ 2€ 1€ 1€

5€ 2€ 2€ 1€ 1€ 1€ 1€ 1€

5€ 2€ 1€ 1€ 1€ 1€ 1€ 1€ 1€

5€ 1€ 1€ 1€ 1€ 1€ 1€ 1€ 1€ 1€

2€ 2€ 2€ 2€ 2€ 2€ 2€

2€ 2€ 2€ 2€ 2€ 2€ 1€ 1€

2€ 2€ 2€ 2€ 2€ 1€ 1€ 1€ 1€

2€ 2€ 2€ 2€ 1€ 1€ 1€ 1€ 1€ 1€

2€ 2€ 2€ 1€ 1€ 1€ 1€ 1€ 1€ 1€ 1€

2€ 2€ 1€ 1€ 1€ 1€ 1€ 1€ 1€ 1€ 1€ 1€

2€ 1€ 1€ 1€ 1€ 1€ 1€ 1€ 1€ 1€ 1€ 1€ 1€

1€ 1€ 1€ 1€ 1€ 1€ 1€ 1€ 1€ 1€ 1€ 1€ 1€ 1€