

24 Lire et écrire les nombres de 20 à 29

✓ J'écris les nombres de 20 à 29 de différentes manières.

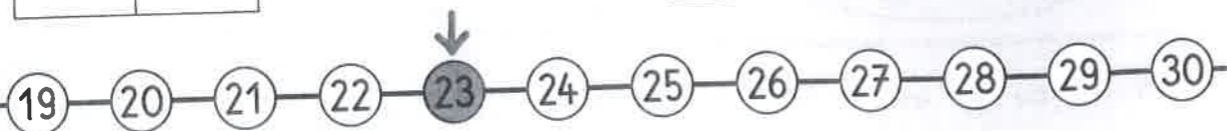

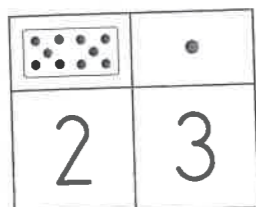
23

23, c'est 23 unités

23, c'est 2 dizaines et 3 unités

$23 = 10 + 10 + 3$


$23 = 20 + 3$



Complète.



20 $10 + 10$



21 $10 + 10 + \dots 1$



22 $10 + 10 + \dots 2$



23 $10 + 10 + \dots 3$



24 $10 + 10 + \dots 4$



25 $10 + 10 + \dots 5$



26 $10 + 10 + \dots 6$



27 $10 + 10 + \dots 7$





28 $10 + 10 + 8$

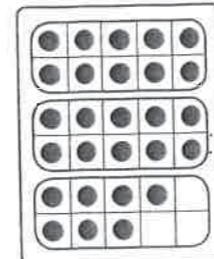


29 $10 + 10 + 9$



Corrige l'erreur dans le tableau de droite.



Colorie ce qui fait 25.



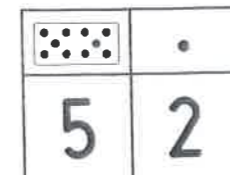


$10 + 5 + 10$



$20 + 5$

2 dizaines et 5 unités




$10 + 20 + 5$


Complète.



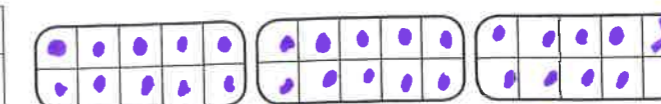

$27 = 10 + 10 + 7$
 $27 = 20 + 7$



$29 = 10 + 10 + 9$
 $29 = 20 + 9$



$26 = 10 + 10 + 6$
 $26 = 20 + 6$



$28 = 10 + 10 + 8$
 $28 = 20 + 8$

